

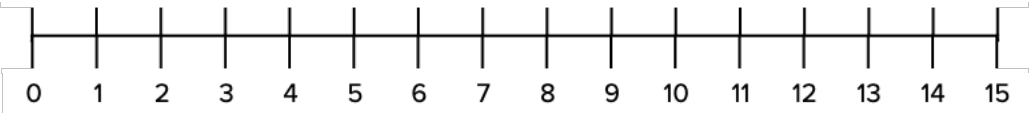


# Subtracting on a Number Line

$5 - 4 = \square$  

$7 - 2 = \square$  

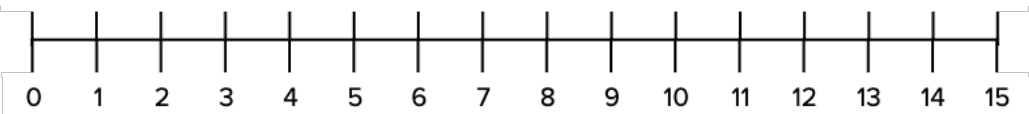
$14 - 6 = \square$  

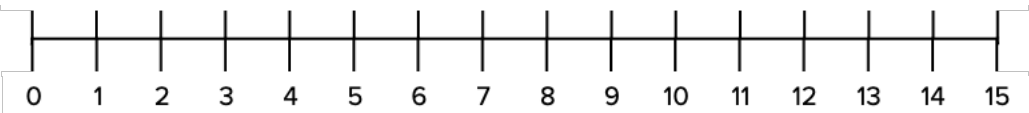
$11 - 3 = \square$  

$12 - 3 = \square$  

$9 - 9 = \square$  

$13 - 4 = \square$  

$15 - 6 = \square$  

$8 - 2 = \square$  

$10 - 1 = \square$  