




Repeated Addition




3 groups of 2 cats

$$2 + 2 + 2 = \underline{\quad}$$



$$3 \times 2 = \underline{\quad}$$






5 groups of 4 fish

$$4 + 4 + 4 + 4 + 4 = \underline{\quad}$$





$$4 \times 5 = \underline{\quad}$$



4 groups of 3 rabbits


$$3 + 3 + 3 + 3 = \underline{\quad}$$




$$3 \times 4 = \underline{\quad}$$




Repeated Addition



_____ groups of _____ cats



$$2 + 2 + 2 = \underline{\hspace{2cm}}$$




$$3 \times 2 = \underline{\hspace{2cm}}$$




_____ groups of _____ fish



$$4 + 4 + 4 + 4 + 4 = \underline{\hspace{2cm}}$$





$$4 \times 5 = \underline{\hspace{2cm}}$$



_____ groups of _____ rabbits



$$3 + 3 + 3 + 3 = \underline{\hspace{2cm}}$$




$$3 \times 4 = \underline{\hspace{2cm}}$$



Repeated Addition



___ groups of ___ cats



_____ = _____

_____ x _____ = _____





___ groups of ___ fish




_____ = _____




_____ x _____ = _____



___ groups of ___ rabbits



_____ = _____



_____ x _____ = _____

