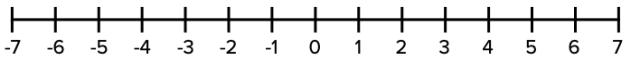
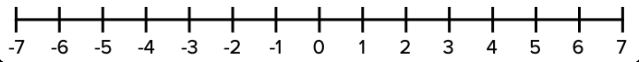


# Graphing Inequalities

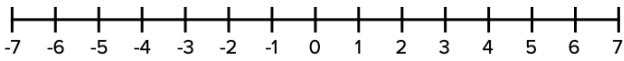
$$4 \leq h$$



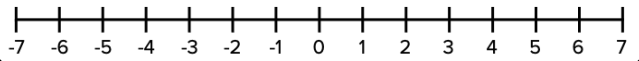
$$5 > r$$



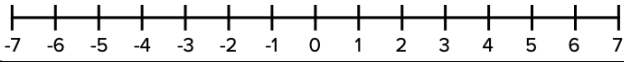
$$-e \leq 2$$



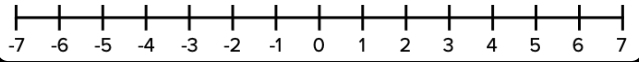
$$f \leq 1$$



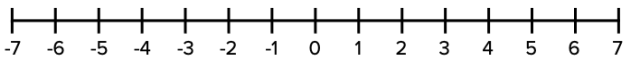
$$4 \leq -p$$



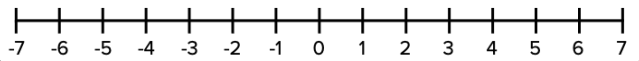
$$s > 3$$



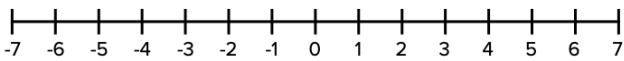
$$6 > t$$



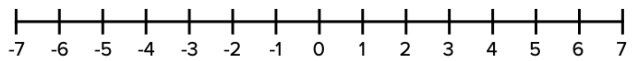
$$-5 < k$$



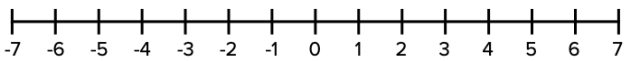
$$-i \leq 0$$



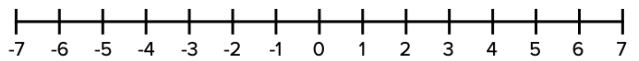
$$4 > n$$



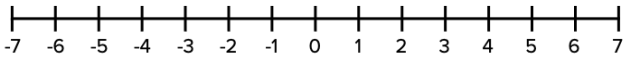
$$1 \leq u$$



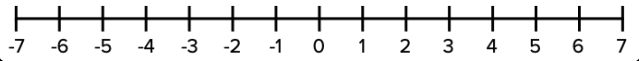
$$v \leq -3$$



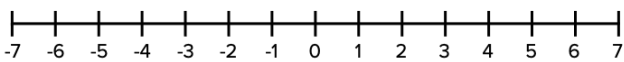
$$-y < 6$$



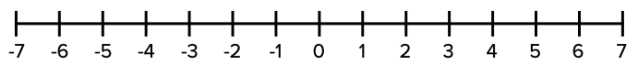
$$c > 2$$



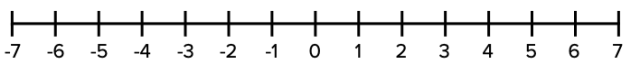
$$10 < b$$



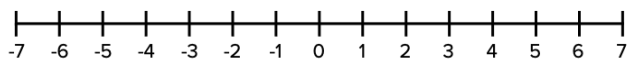
$$-1 \leq j$$



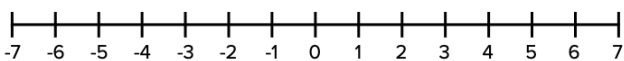
$$d \leq -5$$



$$2 \leq -r$$



$$7 > e$$



$$-6 > v$$

