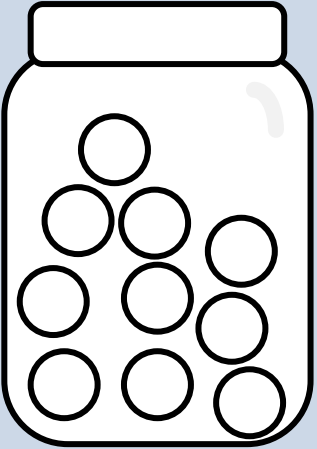



Chance Jars

Read the statements and colour the marbles to make them true.


There is a 1 in 10 chance of getting a red marble.




There is a 1 in 3 chance of getting a blue marble.



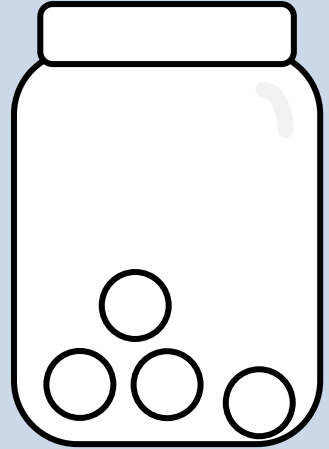
There is a 1 in 8 chance of getting a purple marble.



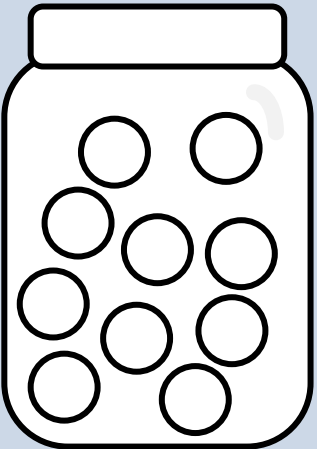
There is a 1 in 6 chance of getting a green marble.



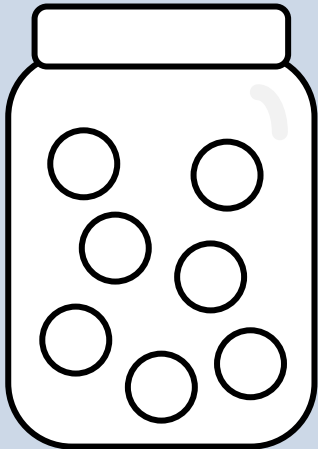
There is a 1 in 4 chance of getting an orange marble.




There is a 5 in 10 chance of getting a yellow marble.




There is a 6 in 7 chance of getting a black marble.



There is a 3 in 9 chance of getting a pink marble.



There is a 2 in 4 chance of getting a red marble.



There is a 8 in 8 chance of getting a blue marble.

