



Sharing Pirate Treasure

The pirates have found treasure, can you help share the treasure, so they have the same amount?




Three pirates are shown: a girl with a skull and crossbones on her hat, a boy with a skull and crossbones on his hat, and a boy with a skull and crossbones on his hat and a parrot on his shoulder. There are six diamonds scattered below them.

Each pirate gets _____




Four pirates are shown: a boy with a skull and crossbones on his hat holding a treasure map, a girl with a skull and crossbones on her hat, a boy with a skull and crossbones on his hat and an eye patch, and a parrot. There are ten diamonds scattered below them.

Each pirate gets _____




Two pirates are shown: a girl with a skull and crossbones on her hat holding a treasure map, and a boy with a skull and crossbones on his hat. There are seven coins scattered below them.

Each pirate gets _____




Three pirates are shown: a boy with a skull and crossbones on his hat and an eye patch, a boy with a skull and crossbones on his hat and a parrot on his shoulder, and a girl with a skull and crossbones on her hat. There are eight diamonds scattered below them.

Each pirate gets _____



Four pirates are shown: a boy with a skull and crossbones on his hat holding a treasure map, a boy with a skull and crossbones on his hat and a parrot on his shoulder, a girl with a skull and crossbones on her hat, and a boy with a skull and crossbones on his hat and an eye patch. There are seven coins scattered below them.

Each pirate gets _____



Two pirates are shown: a girl with a skull and crossbones on her hat and a parrot. There are four diamonds scattered below them.

Each pirate gets _____