


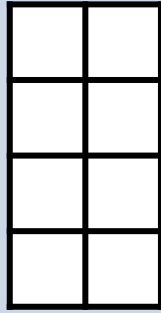
# Area and Perimeter

Calculate the area and perimeter of the shapes.




Area:   $cm^2$

Perimeter:   $cm$



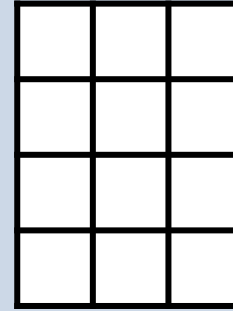
Area:   $cm^2$

Perimeter:   $cm$



Area:

Perimeter:



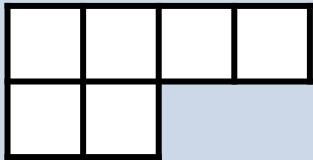
Area:

Perimeter:




Area:

Perimeter:



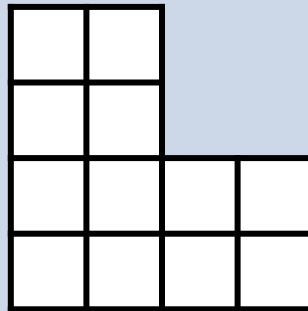
Area:

Perimeter:



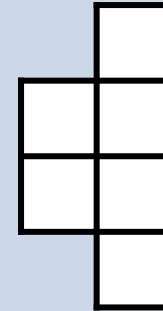
Area:

Perimeter:



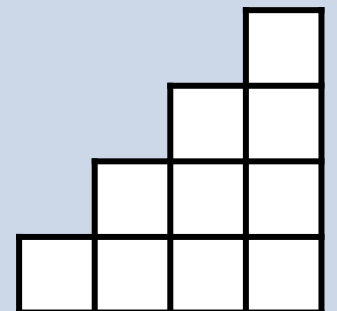
Area:

Perimeter:



Area:

Perimeter:



Area:

Perimeter: